

NAME: \_\_\_\_\_



TEACHER: \_\_\_\_\_

GRADE & SECTION: \_\_\_\_\_

DATE: \_\_\_\_\_

# LONG, LONGER, LONGEST

Which one is it? Number the following groups with 1, 2, and 3 to show which one is long, longer, and longest.

NAME: \_\_\_\_\_


TEACHER: \_\_\_\_\_

GRADE & SECTION: \_\_\_\_\_

DATE: \_\_\_\_\_

# LONG, LONGER, LONGEST


Which one is it? Number the following groups with 1, 2, and 3 to show which one is long, longer, and longest.



3

2

1



1

3

2



2

1

3



3

1

2