

Name: _____

Date: _____

Section: _____






Score: _____

FRUIT MATH

LET'S ADD THESE FRUITS UP!

Directions: How many fruits can you see? Add them all up, then write the answer in the box. Make sure to double check your answers before submitting!

Perfect scores get a prize from Ms. Lucy.



--

Name: _____

Date: _____

Section: _____





Score: _____

FRUIT MATH

LET'S ADD THESE FRUITS UP!

Directions: How many fruits can you see? Add them all up, then write the answer in the box. Make sure to double check your answers before submitting!

Perfect scores get a prize from Ms. Lucy.



23 in total fruits.