

Fishy Mathematics

Let's learn the Equal, Less & Greater Than Symbols

Name:


Date:

Section:


Score:

Count the fish in the fishbowls and write down the correct number. Then, compare the number and write $>$, $<$ or $=$ to show which fishbowl has more, less, or equal number of fish.


1.




—




2.




—



3.



—



Fishy Mathematics

Let's learn the Equal, Less & Greater Than Symbols

Name:


Date:

Section:

Score:


Count the fish in the fishbowls and write down the correct number. Then, compare the number and write $>$, $<$ or $=$ to show which fishbowl has more, less, or equal number of fish.

1. 4




$>$

2




2. 3




$=$

3



3. 5



$<$

6

